


Welcome to Fourth Grade!

JULY 2023

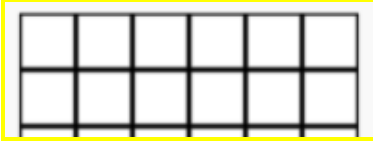



| Monday | Tuesday | Wednesday | Thursday | Friday |
|--|--|---|--|--|
| 3 FREE DAY! | 4 John started his math homework at 4:20pm and finished at 4:44pm how long did it take him? _____ | 5 Go to a math website to play a math game Write the math game you played _____ Parent initials _____ | 6 Write the 7X tables 2 times neatly on a <u>separate sheet</u> of paper. | 7 Estimate $288 + 79$ |
| 10 Write the fractions from least to greatest $2/3, 2/2, 2/8$ | 11 Go to a math website to play a math game Write the math game you played _____ Parent initials _____ | 12 FREE DAY! | 13 Practice your multiplication Flashcards for 10 minutes. Parent initials _____ | 14 $239 + 240 =$ |
| 17 Go to a math website to play a math game Write the math game you played _____ Parent initials _____ | 18 Write the 8X tables 2 times neatly on a <u>separate sheet</u> of paper. | 19 $39 + 45 + 72 =$ | 20 FREE DAY! | 21 Write a fraction equivalent to three-thirds. |
| 24 Round 128 to the nearest ten and hundred _____ _____ | 25 FREE DAY! | 26 $200 - 138 =$ | 27 Go to a math website to play a math game. Write the math game you played _____ Parent initials _____ | 28 Practice your multiplication Flashcards for 10 minutes. _____ Parent initials |



AUGUST 2023



| Monday | Tuesday | Wednesday | Thursday | Friday |
|---|--|--|--|--|
| | 1 FREE DAY! | 2 Spend 10 minutes on Reflex Math. Set a timer! | 3 Find the perimeter:  | 4 Write your multiplication facts in chalk outside! |
| 7 $3001 - 456 =$ | 8 Find the area:  | 9 FREE DAY! | 10 Go to a math website to play a math game Write the math game you played _____ Parent initials _____ | 11 Practice your multiplication flashcards for 10 minutes. Parent initials _____ |
| 14 Find the exact answer $836 + 239 =$ | 15 If Casey stopped reading at 5:50 and he read for 48 minutes, what time did he start reading? | 16 Go to a math website to play a math game Write the math game you played _____ Parent initials _____ | 17 Write the 9X tables 2 times neatly on a <u>separate sheet</u> of paper | 18 Round 295 to the nearest tens and hundreds _____ _____ |
| 21 Write the fractions greatest to least $2/10, 8/10, 3/10$ | 22 Go to a math website to play a math game Write the math game you played _____ Parent initials _____ | 23 Practice your multiplication Flashcards for 10 minutes. _____ Parent initials _____ | 24 FREE DAY! | 25 Estimate $139 + 44$ |
| 28 $405 - 189 =$ | 29 Go buy your school supplies! | 30 Go to a math website to play a math game Write the math game you played _____ Parent initials _____ | 31 Use greater than or less than or equal to. $2/8$ _____ $6/8$ | |